

Name _____

Count By 5's and 10's

Fill in the missing numbers



5 _____ 20 _____ 30



_____ 40 _____ 50 _____



25 _____ 40 _____



10 _____ 30 _____




_____ 70 _____ 90 _____



40 _____ 60 _____ 80

Name _____

Subtraction Story Problems




4 Bees were in the hive.
1 flew away.
How many bees were left?

$$\underline{\quad} - \underline{\quad} = \underline{\quad}$$




3 caterpillars were crawling.
2 became butterflies.
How many were left?

$$\underline{\quad} - \underline{\quad} = \underline{\quad}$$




5 flies were flying.
4 got swatted.
How many flies were left?

$$\underline{\quad} - \underline{\quad} = \underline{\quad}$$



6 flowers were growing.
3 got picked.
How many were left?

$$\underline{\quad} - \underline{\quad} = \underline{\quad}$$



4 ladybugs were crawling.
2 flew away.
How many were left?

$$\underline{\quad} - \underline{\quad} = \underline{\quad}$$



1 worm was squirming.
1 worm went down the hole.
How many were left?

$$\underline{\quad} - \underline{\quad} = \underline{\quad}$$