

# Daily Math Warm Ups

Practicing K & 1 Common Core Math Standards

© Tessa Maguire, 2012

<http://talesfromoutsidetheclassroom.blogspot.com>

Graphics:

<http://frompond.blogspot.com>

## Skills/Standards\*

- K.OA.1, & 1.OA.1— Creating number sentences from pictures
- K.OA.2— Solve addition and subtraction word problems
  - K.OA.3— Making representations of numbers
- K.OA.4 & 1.OA.4 & 1.OA.8— Find the missing number to solve the equation.
- K.NBT.1 & 1.NBT.2— Understanding tens and ones
  - 1.OA.3— Fact Families
- 1.OA.6— Adding and subtracting within 20 fluently.
- 1.OA.7— Determining if equations are true or false.
  - 1.NBT.3— Comparing two digit numbers
- 1.NBT.5 & 1.NBT.6— Understanding place value
  - 1.MD.3— Telling time to the hour
  - 1.MD.4— Interpreting data from graphs

Name: \_\_\_\_\_



Date: \_\_\_\_\_

$$\begin{array}{r} 6 \\ + 3 \\ \hline \end{array}$$
$$\begin{array}{r} 4 \\ + 3 \\ \hline \end{array}$$
$$\begin{array}{r} 3 \\ + 2 \\ \hline \end{array}$$
$$\begin{array}{r} 8 \\ + 1 \\ \hline \end{array}$$

$$\begin{array}{r} 6 \\ - 3 \\ \hline \end{array}$$
$$\begin{array}{r} 4 \\ - 3 \\ \hline \end{array}$$
$$\begin{array}{r} 3 \\ - 2 \\ \hline \end{array}$$
$$\begin{array}{r} 8 \\ - 1 \\ \hline \end{array}$$


$$\begin{array}{r} 7 \\ + 2 \\ \hline \end{array}$$
$$\begin{array}{r} 2 \\ + 1 \\ \hline \end{array}$$
$$\begin{array}{r} 6 \\ + 4 \\ \hline \end{array}$$

$$\begin{array}{r} 7 \\ - 2 \\ \hline \end{array}$$
$$\begin{array}{r} 2 \\ - 1 \\ \hline \end{array}$$
$$\begin{array}{r} 6 \\ - 4 \\ \hline \end{array}$$



Complete the pattern.

2, 4, 6, \_\_\_\_\_, \_\_\_\_\_



Use < or > sign.

64 ○ 36



43 ○ 62

21 ○ 12

34 ○ 43

12, 14, \_\_\_\_\_, 18


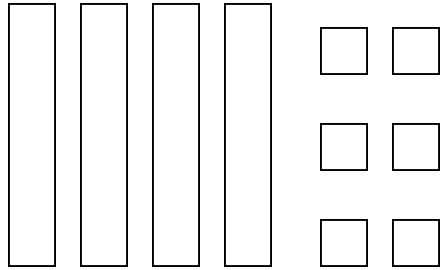
Show 3 ways to make 10.



Name: \_\_\_\_\_

Date: \_\_\_\_\_

What number is this?




Draw a picture to help you answer the story problem.

There were 5 bunnies on the grass. 3 hopped away. How many are left?

Write the fact family for  
3, 5, 8

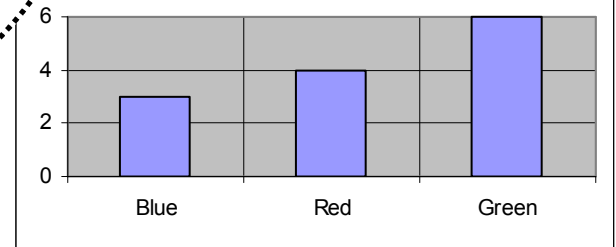
\_\_\_\_\_

Write the value for the coins.




\_\_\_\_\_

Colors



Which color is there 3 of?




\_\_\_\_\_

Name: \_\_\_\_\_

Date: \_\_\_\_\_

True or False?

$$6 - 2 = 5 - 1$$



Draw a picture to help you answer the story problem.

Jake had 6 markers. He gave 2 to his friend Jim. How many markers does Jake have now?

Fill in the missing number.

$$19 \quad \underline{\quad} \quad 21 \qquad 24 \quad \underline{\quad} \quad 26$$

$$42 \quad \underline{\quad} \quad 44 \qquad 72 \quad \underline{\quad} \quad 74$$

\_\_\_\_\_



Write the value for the coins.



\_\_\_\_\_

Add.

5	5	3
2	3	2
<u>+ 1</u>	<u>+ 1</u>	<u>+ 2</u>




Name: \_\_\_\_\_

Date: \_\_\_\_\_

True or False?

$$6 - 2 = 5 - 1$$



Draw a picture to help you answer the story problem.

Jake had 6 markers. He gave 2 to his friend Jim. How many markers does Jake have now?

Fill in the missing number.

$$19 \quad \underline{\quad} \quad 21 \qquad 24 \quad \underline{\quad} \quad 26$$


$$42 \quad \underline{\quad} \quad 44 \qquad 72 \quad \underline{\quad} \quad 74$$

\_\_\_\_\_

Write the value for the coins.



\_\_\_\_\_




Add.

$$\begin{array}{r} 5 \\ 2 \\ + 1 \\ \hline \end{array}$$

$$\begin{array}{r} 5 \\ 3 \\ + 1 \\ \hline \end{array}$$

$$\begin{array}{r} 3 \\ 2 \\ + 2 \\ \hline \end{array}$$




Name: \_\_\_\_\_

Date: \_\_\_\_\_

What is today's date? \_\_\_\_\_

What day of the week is it?  
\_\_\_\_\_



What will **tomorrow's** date be?  
\_\_\_\_\_

Fill in the missing numbers.


56	
	67

Fill in the missing number.

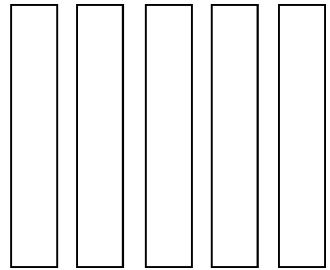
$12 + \underline{\quad} = 19$

$14 + \underline{\quad} = 16$

$15 + \underline{\quad} = 20$


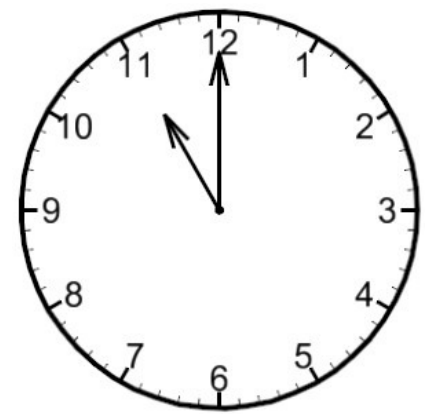


Write the number that is shown.



\_\_\_\_\_

What time is it?



\_\_\_\_\_

Thank you for downloading this warm up pack.

I hope you enjoyed it and consider  
purchasing the full packet.

Check out my blog

<http://talesfromoutsidetheclassroom.blogspot.com>

for other math activities and tons of free items!

Facebook: <http://www.facebook.com/TalesfromOutsideTheClassroom>

Pinterest: <http://pinterest.com/tesser88>