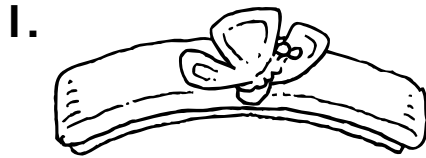


# Centimeters

Estimate the length of each object.  
Then use a ruler to measure.



Estimate: about \_\_\_\_\_ cm

Measure: about \_\_\_\_\_ cm



Estimate: about \_\_\_\_\_ cm

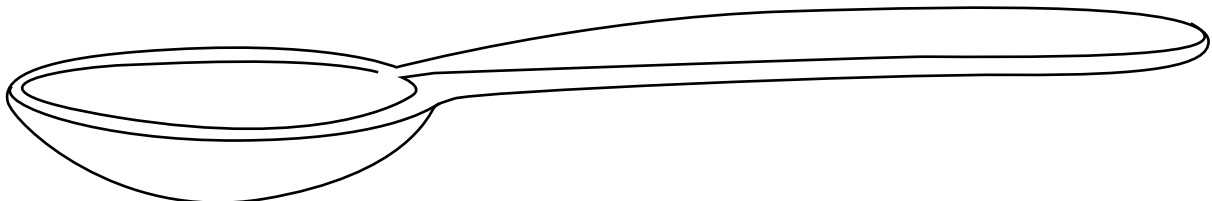
Measure: about \_\_\_\_\_ cm



Estimate: about \_\_\_\_\_ cm

Measure: about \_\_\_\_\_ cm

4. Look at the spoon. Measure the length of the spoon in centimeters. About how long is the spoon?


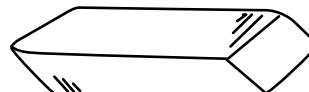


- (A) about 10 centimeters      (C) about 16 centimeters  
(B) about 13 centimeters      (D) about 18 centimeters

5. **Spatial Thinking** Choose the object that is about 1 centimeter long.



(C)



(D)

