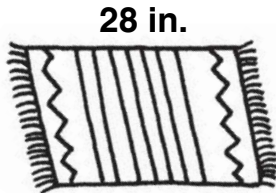


Name \_\_\_\_\_

# Adding and Subtracting in Measurement

Write a number sentence to solve each problem.

1. What is the distance around the rug?

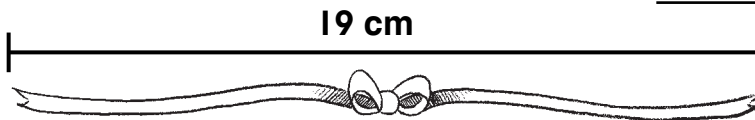
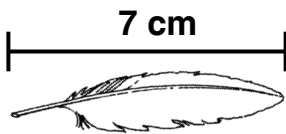


\_\_\_\_\_

Distance around: \_\_\_\_\_ in.

---

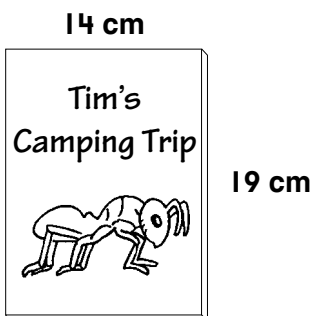
2. How much shorter is the feather than the ribbon?



\_\_\_\_\_ cm shorter

---

3. **Algebra** Which number sentence shows the distance around the cover of the DVD case?



- (A)  $14\text{ cm} + 19\text{ cm} + 14\text{ cm} = 47\text{ cm}$
- (B)  $14\text{ cm} + 19\text{ cm} + 14\text{ cm} + 19\text{ cm} = 66\text{ cm}$
- (C)  $19\text{ cm} + 14\text{ cm} = 33\text{ cm}$
- (D)  $19\text{ cm} - 14\text{ cm} = 5\text{ cm}$