

3-1 Solving Systems of Equations

Solve each system of equations by using a table.

1. $y = 3x - 4$
 $y = -2x + 11$

ANSWER:
 (3, 5)

Solve each system of equations by graphing.

3. $y = -3x + 6$
 $2y = 10x - 36$

ANSWER:
 (3, -3)

5. $y = 0.5x + 4$
 $3y = 4x - 3$

ANSWER:
 (6, 7)

7. $4x + 5y = -41$
 $3y - 5x = 5$

ANSWER:
 (-4, -5)

9. **CCSS MODELING** Refer to the table below.

Digital Photos
Online Store \$0.15 per photo + \$2.70 shipping
Local Store \$0.25 per photo

- Write equations that represent the cost of printing digital photos at each lab.
- Under what conditions is the cost to print digital photos the same at both stores?
- When is it best to use EZ Online Digital Photos and when is it best to use the local pharmacy?

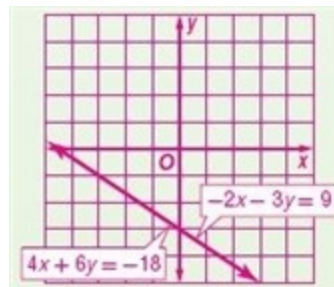
ANSWER:

- $y = 0.15x + 2.70$, $y = 0.25x$
- \$6.75 for 27 photos
- You should use EZ Online Digital Photos if you are printing more than 27 digital photos and the local pharmacy if you are printing fewer than 27 photos.

Graph each system of equations and describe it as *consistent and independent*, *consistent and dependent*, or *inconsistent*.

11. $-2x - 3y = 9$
 $4x + 6y = -18$

ANSWER:



consistent, dependent

Solve each system of equations by using substitution.

13. $x + 5y = 3$
 $3x - 2y = -8$

ANSWER:
 (-2, 1)

15. $2a + 8b = -8$
 $3a - 5b = 22$

ANSWER:
 (4, -2)

17. $6x - 7y = 23$
 $8x + 4y = 44$

ANSWER:
 (5, 1)

Solve each system of equations by using elimination.

19. $-6w - 8z = -44$
 $3w + 6z = 36$

ANSWER:
 (-2, 7)

3-1 Solving Systems of Equations

21. $3a + 5b = -27$
 $4a + 10b = -46$

ANSWER:

$(-4, -3)$

23. $5a + 15b = -24$
 $-2a - 6b = 28$

ANSWER:

No solution

25. **MULTIPLE CHOICE** What is the solution of the linear system?

$$4x + 3y = 2$$

$$4x - 2y = 12$$

A $(8, -10)$

B $(2, -2)$

C $(-10, 14)$

D no solution

ANSWER:

B

Solve each system of equations by using a table.

27. $3x - 4y = 16$
 $-6x + 5y = -29$

ANSWER:

$(4, -1)$

29. **FUNDRAISER** To raise money for new uniforms, the band boosters sell T-shirts and hats. The cost and sale price of each item is shown. The boosters spend a total of \$2000 on T-shirts and hats. They sell all of the merchandise, and make \$3375. How many T-shirts did they sell?

Item	Cost	Sale Price
T-Shirt	\$6	\$10
Hat	\$4	\$7

ANSWER:

250 T-shirts

Solve each system of equations by graphing.

31. $4x + 3y = -24$
 $8x - 2y = -16$

ANSWER:

$(-3, -4)$

33. $-3x - 8y = 12$
 $12x + 32y = -48$

ANSWER:

Infinite solutions

35. $-10x + 4y = 7$
 $2x - 5y = 7$

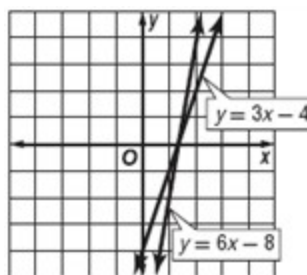
ANSWER:

$(-1.5, -2)$

Graph each system of equations and describe it as *consistent and independent*, *consistent and dependent*, or *inconsistent*.

37. $y = 3x - 4$
 $y = 6x - 8$

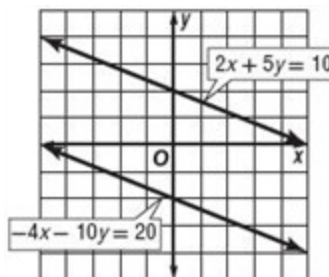
ANSWER:



consistent and independent

39. $2x + 5y = 10$
 $-4x - 10y = 20$

ANSWER:

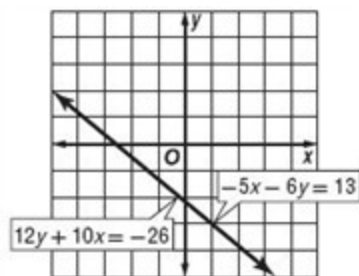


inconsistent

3-1 Solving Systems of Equations

41. $-5x - 6y = 13$
 $12y + 10x = -26$

ANSWER:



consistent and dependent

Solve each system of equations by using substitution.

43. $9y + 3x = 18$
 $-3y - x = -6$

ANSWER:

Infinite solutions

45. $-4x - 16y = -96$
 $7x + 3y = 68$

ANSWER:

(8, 4)

47. $-9c - 4d = 31$
 $6c + 6d = -24$

ANSWER:

(-3, -1)

49. **TENNIS** At a park, there are 38 people playing tennis. Some are playing doubles, and some are playing singles. There are 13 matches in progress. A doubles match requires 4 players, and a singles match requires 2 players.

- Write a system of two equations that represents the number of singles and doubles matches going on.
- How many matches of each kind are in progress?

ANSWER:

- $x + y = 13$ and $4x + 2y = 38$
- 6 doubles matches and 7 singles matches

Solve each system of equations by using elimination.

51. $2a - 5b = -20$
 $2a + 5b = 20$

ANSWER:

(0, 4)

53. $3x - 8y = 24$
 $-12x + 32y = 96$

ANSWER:

No solution

55. $r - 6t = 44$
 $9r + 12t = 0$

ANSWER:

(8, -6)

57. $11u = 5v + 35$
 $8v = -6u + 62$

ANSWER:

(5, 4)

Use a graphing calculator to solve each system of equations. Round the coordinates of the intersection to the nearest hundredth.

59. $12y = 5x - 15$
 $4.2y + 6.1x = 11$

ANSWER:

(2.07, -0.39)

61. $5.8x - 6.3y = 18$
 $-4.3x + 8.8y = 32$

ANSWER:

(15.03, 10.98)

Solve each system of equations.

63. $8r - 5t = -60$
 $6r + 3t = -18$

ANSWER:

(-5, 4)

3-1 Solving Systems of Equations

65. $6w = 12 - 4x$
 $6x = -9w + 18$

ANSWER:

infinite solutions

67. $\frac{5}{2}a - \frac{3}{4}b = 46$
 $-\frac{7}{8}a - 3b = 10$

ANSWER:

(16, -8)

69. **CCSS MODELING** The table shows the winning times in seconds for the 100-meter dash at the Olympics between 1964 and 2008.

Years Since 1964, x	Men's Gold Medal Time	Women's Gold Medal Time
0	10.0	11.4
4	9.90	11.0
8	10.14	11.07
12	10.06	11.08
16	10.25	11.06
20	9.99	10.97
24	9.92	10.54
28	9.96	10.82
32	9.84	10.94
36	9.87	10.75
40	9.85	10.93
44	9.69	10.78

- a. Write equations that represent the winning times for men and women since 1964. Assume that both times continue along the same trend.
b. Graph both equations. Estimate when the women's performance will catch up to the men's performance. Do you think that your prediction is reasonable? Explain.

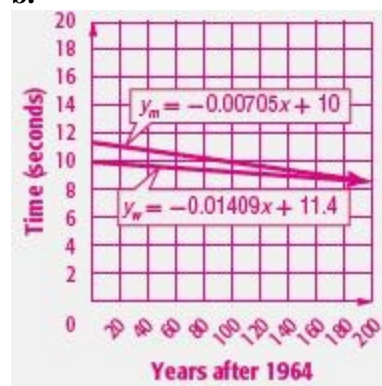
ANSWER:

- a. Sample answer for men using (0, 10) and (44, 9.69):

$y_m = -0.00705x + 10$; sample answer for women using (0, 11.4) and (44, 10.78):

$y_w = -0.01409x + 11.4$

b.



Based on these data, the women's performance will catch up to the men's performance 198 years after 1964, or in the year 2162. The next Olympic year would be 2164; this prediction is not reasonable. It is unlikely that women's times will ever catch up to men's times because the times cannot continue to increase and decrease infinitely.

3-1 Solving Systems of Equations

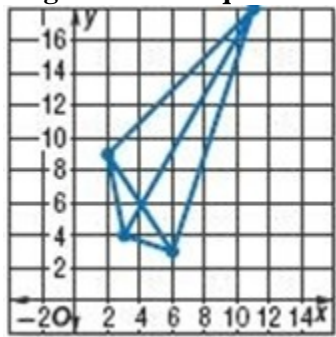
71. **TRAVEL** A youth group went on a trip to an amusement park, travelling in two vans. The number of people in each van and the total cost of admission are shown in the table. Find the adult price and student price of admission.

	Adults	Students	Total Cost
Van A	2	5	\$77
Van B	2	7	\$95

ANSWER:

adult: \$16; student: \$9

GEOMETRY Find the point at which the diagonals of the quadrilaterals intersect.



73.

ANSWER:

$$\left(\frac{53}{13}, \frac{153}{26} \right)$$

75. **MULTIPLE REPRESENTATIONS** In this problem, you will explore systems of equations with three linear equations and two variables.

$$3y + x = 16$$

$$y - 2x = -4$$

$$y + 5x = 10$$

- TABULAR** Make a table of x and y -values for each equation.
- ANALYTICAL** Which values from the table indicate intersections? Is there a solution that satisfies all three equations?
- GRAPHICAL** Graph the three equations on a single coordinate plane.
- VERBAL** What conditions must be met for a system of three equations with two variables to have a solution? What conditions result in no solution?

ANSWER:

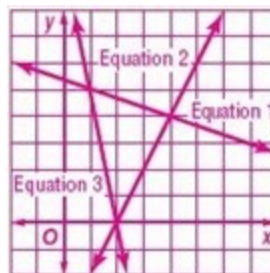
a.

Equation 1		Equation 2	
x	y	x	y
0	$\frac{16}{3}$	0	-4
1	5	1	-2
2	$\frac{14}{3}$	2	0
3	$\frac{13}{3}$	3	2
4	4	4	4

Equation 3	
x	y
0	10
1	5
2	0
3	-5
4	-10

- Equations 1 and 2 intersect at (4, 4), equations 2 and 3 intersect at (2, 0), and equations 1 and 3 intersect at (1, 5); there is no solution that satisfies all three equations.

c.



- If all three lines intersect at the same point, then the system has a solution. The system has no solution if the lines intersect at 3 different points, or if two or three lines are parallel.

77. **CHALLENGE** Find values of a and b for which the following system has a solution of $(b - 1, b - 2)$.

$$-8ax + 4ay = -12a$$

$$2bx - by = 9$$

ANSWER:

$$a \neq 0, b = 3$$

3-1 Solving Systems of Equations

79. **OPEN ENDED** Write a system of equations in which one equation needs to be multiplied by 3 and the other needs to be multiplied by 4 in order to solve the system with elimination. Then solve your system.

ANSWER:

Sample answer:

$$4x + 5y = 21 \text{ and } 3x - 2y = 10;$$

$$(4, 1)$$

81. **SHORT RESPONSE** Simplify $3y(4x + 6y - 5)$

ANSWER:

$$12xy + 18y^2 - 15y$$

83. **GEOMETRY** Which set of dimensions corresponds to a triangle similar to the one shown at the right?

F 1 unit, 2 units, 3 units

G 7 units, 11 units, 12 units

H 10 units, 23 units, 24 units

J 20 units, 48 units, 52 units



ANSWER:

J

85. **CRAFTS** Priscilla sells stuffed animals at a local craft show. She charges \$10 for the small ones and \$15 for the large ones. To cover her expenses, she needs to sell at least \$350.

a. Write an inequality for this situation.

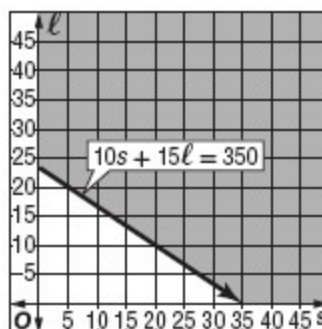
b. Graph the inequality.

c. If she sells 10 small and 15 large animals, will she cover her expenses?

ANSWER:

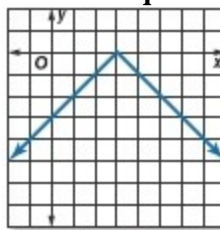
a. $10s + 15l \geq 350$

b.



c. no

Write an equation for each function.



87.

ANSWER:

$$y = -|x - 3|$$

Solve each equation. Check your solution.

89. $2p = 14$

ANSWER:

$$7$$

91. $7a - 3a + 2a - a = 16$

ANSWER:

$$3.2$$

93. $27 = -9(y + 5) + 6(y + 8)$

ANSWER:

$$-8$$

3-1 Solving Systems of Equations

Determine whether the given point satisfies each inequality.

95. $4x + 5y \leq 15; (2, -2)$

ANSWER:

yes

97. $6x + 9y < -1; (0, 0)$

ANSWER:

no